


# FRACTIONS

1



$\frac{1}{6}$

$\frac{1}{2}$




$\frac{1}{7}$

$\frac{1}{3}$




$\frac{1}{8}$

$\frac{1}{4}$



$\frac{1}{9}$

$\frac{1}{5}$



$\frac{1}{10}$